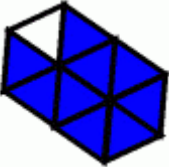
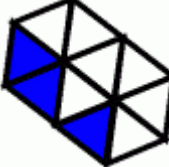
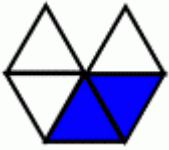
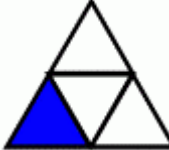
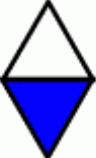
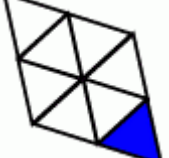
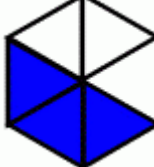

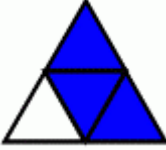
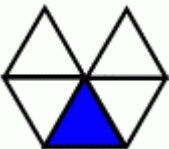


# Bruchdarstellungen II

1) Schneide die Kärtchen aus und ordne sie paarweise.

2) Spielt mit den Kärtchen Memory. Wer erhält die meisten Paare?

			$\frac{1}{5}$
$\frac{3}{5}$		$\frac{3}{4}$	
	$\frac{4}{5}$		$\frac{1}{10}$
$\frac{9}{10}$		$\frac{3}{10}$	
	$\frac{2}{5}$		$\frac{1}{4}$
$\frac{1}{2}$		$\frac{1}{8}$	